



## *Holy Name of Jesus School*

### **Summer Reading and Math Work (Accelerated Math) Students Entering Grade 8 – 2020/2021 School Year**

#### **READING:**

Students entering Grade 8 **are required** to read the following book:

***The Outsiders*** (S.E. Hinton)

Students will be assessed on the story and should be prepared for in-class discussion.

#### **Assignments:**

Students must choose one (1) additional book from the list below and complete a book report using the *Free Choice Book* form (included):

- ***Night*** (Eli Wiesel)
- ***Surviving Hitler*** (Andrea Warren)
- ***Stargirl*** (Jerri Spinelli)
- ***Fever 1793*** (Laurie Halse Anderson)

### **Summer Reading Work – 7<sup>th</sup> and 8<sup>th</sup> grades**

**Use your free choice book to answer all of the following:**

1. Write one or two paragraphs that give the summary of the book, including the characters, setting, time frame, and plot.
2. The theme of a story is the central message or lesson the author wants you to learn from reading the book. Write one paragraph on what you think the theme is. Provide events or evidence from the story to prove that this is what you think the theme is. For example, the theme of *The Giver* is that memories are important to human beings.
3. From one or two pages of your book, list 5 of each of the following parts of speech.
  - 5 nouns
  - 5 verbs
  - 5 adjectives
  - 5 adverbs
  - 5 pronouns
4. Write one paragraph describing the main character. What does he/she look like? How does he/she react? What are the conflicts he/she is dealing with? Does he/she change in the story? How does he/she solve the conflicts?
5. Describe the setting and the time the story takes place. Is the setting important to the story? Why?

**READ 20 MINUTES THREE OR FOUR TIMES A WEEK. KEEP A LOG OF BOOKS READ.**

**SUMMER ENGLISH REVIEW – Complete 6 pages**

**To prepare for National History Day**

Students are required to begin basic research related to the theme, '**Communication in History: The Key to Understanding.**' Please visit the National History Day website at [www.nhd.org](http://www.nhd.org) for a detailed explanation regarding the meaning of this year's theme. Students are not locked in to the topic they researched for their National History Day projects – this assignment is intended to generate in-class Social Studies discussions.

**Communications in History:**

Exchange of information, methods, modes, how words, thoughts and ideas have influenced society (ex: Declaration of Independence, letters, speeches, political cartoons, news media, etc.) protests, inventions and innovation.

Students must write a good paragraph (5-8 sentences) on the following points:

1. Who or What was involved?
2. What form of communication was used?
3. What was the short-term and long-term outcome?
4. What were the positive and negative outcome?
5. How was history changed?

Some examples of basic research:

1. Online searches ([www.Biography.com](http://www.Biography.com), [www.ExplorePAHistory.com](http://www.ExplorePAHistory.com))
2. Watch The History Channel.
3. While on vacation, look for historic sites where communication had an impact on history.

**MATH: Complete 2 pages**

# 8<sup>th</sup> GRADE SUMMER ENGLISH REVIEW

## GRAMMAR, USAGE, AND MECHANICS:

### Part 1: Identifying Parts of Speech

On the lines, write the part of speech of each underlined word: *noun, pronoun, verb, adjective, adverb, preposition, conjunction, or interjection.*

1. My little sister, Annie, pretends to be a princess. \_\_\_\_\_
2. She can play make-believe games for hours. \_\_\_\_\_
3. Her friend Tasha plays with her. \_\_\_\_\_
4. Annie and Tasha are best friends. \_\_\_\_\_
5. They play together well. \_\_\_\_\_
6. When I was little, I pretended to be a knight. \_\_\_\_\_
7. I built a castle out of cardboard boxes. \_\_\_\_\_
8. Well, it seemed very exciting back then. \_\_\_\_\_
9. That was my favorite game. \_\_\_\_\_
10. I had such a vivid imagination. \_\_\_\_\_

### Part 2: Identifying Subjects and Verbs

Identify the simple subject and the verb in each sentence below.

11. The games on this shelf are very old.  
S: \_\_\_\_\_ V: \_\_\_\_\_
12. When did we get them?  
S: \_\_\_\_\_ V: \_\_\_\_\_
13. There are so many missing pieces!  
S: \_\_\_\_\_ V: \_\_\_\_\_
14. Take some of these to the basement.  
S: \_\_\_\_\_ V: \_\_\_\_\_
15. In the spring, maybe we will have a garage sale.  
S: \_\_\_\_\_ V: \_\_\_\_\_

### Part 3: Identifying Complements

Write the complements in the following sentences and label each one *direct object, indirect object, predicate noun, or predicate adjective.*

16. Spring is my favorite season.  
\_\_\_\_\_
17. I really enjoy the tulips and daffodils.  
\_\_\_\_\_
18. We always give our neighbors flowers on May Day.  
\_\_\_\_\_
19. The red tulips are the prettiest.  
\_\_\_\_\_

Name \_\_\_\_\_

20. My grandmother sent us pictures of her garden.
- \_\_\_\_\_

**Part 4: Identifying Phrases and Clauses**

Write all the phrases in the following sentences and label each one *adjective phrase*, *adverb phrase*, *appositive phrase*, *participial phrase*, *gerund phrase*, or *infinitive phrase*. Then, write any subordinate clauses in the sentences and label them *adjective* or *adverb*.

21. The boy in this picture is an old friend whom I haven't seen lately.
- \_\_\_\_\_

22. Jeremy, my closest childhood friend, moved to Texas when we were twelve.
- \_\_\_\_\_

23. Sending him e-mail is lots of fun because it is so inexpensive.
- \_\_\_\_\_

24. He and I like to play on-line computer games together, too.
- \_\_\_\_\_

25. Communicating this way, we can still share all the things that interest both of us.
- \_\_\_\_\_

**Part 5: Correcting Sentence Structure Errors**

Revise each of the following items, correcting all errors in sentence structure. To complete the fragments, add any information you like.

26. Making a loud grinding noise in the gears, Dad took the car to a mechanic.
- \_\_\_\_\_

27. The mechanic took a test drive, he also looked under the hood and tested all the engine parts, then he finally told Dad what the problem was.
- \_\_\_\_\_

28. Because the repair would be very expensive. Dad thinking about a new car.
- \_\_\_\_\_

29. Dad, the next day deciding to buy a new car.
- \_\_\_\_\_

30. Getting my license next year, the new car will be fun to drive.
- \_\_\_\_\_

Name \_\_\_\_\_

**Part 6: Choosing the Correct Usage**

For each sentence, write the correct form from the pair of words or phrases in parentheses.

31. Everyone (accept, except) me arrived at the game on time.  
\_\_\_\_\_
32. I hadn't (ever, never) been late for a game before.  
\_\_\_\_\_
33. The reason I was late is (because, that) my uniform was still in the washing machine.  
\_\_\_\_\_
34. (Beside, Besides) that, I couldn't find my sneakers.  
\_\_\_\_\_
35. I suppose I'm (kind of, somewhat) disorganized.  
\_\_\_\_\_
36. (There, Their) are several things I need to do to get organized.  
\_\_\_\_\_
37. My friend Nick is having a good (affect, effect) on me.  
\_\_\_\_\_
38. His personality is very different (from, than) mine.  
\_\_\_\_\_
39. He's very organized at school, and he's organized at home, (to, too).  
\_\_\_\_\_
40. He's helping me schedule my time so that I don't get into any (farther, further) trouble with the coach.  
\_\_\_\_\_

**Part 7: Using Irregular and Troublesome Verbs**

For each sentence, choose the correct verb form in parentheses.

41. I (saw, seen) a great video last night.  
\_\_\_\_\_
42. After she (did, done) her homework, Haley called a friend.  
\_\_\_\_\_
43. We arrived five minutes after the movie had (began, begun).  
\_\_\_\_\_
44. My dad said that the game I wanted (cost, costed) too much.  
\_\_\_\_\_
45. We (bayed, bought) a cheaper one instead.  
\_\_\_\_\_
46. My dad is trying to (learn, teach) me to save my own money.  
\_\_\_\_\_
47. Yesterday he (says, said) that I (ain't, am not) responsible with my money.  
\_\_\_\_\_

Name \_\_\_\_\_

48. He already (raised, rose) my allowance once this year.  
\_\_\_\_\_
49. I guess I (should of, should have) saved the extra money.  
\_\_\_\_\_
50. I'll just have to (sit, set) at home tonight, instead of going out to the movies.  
\_\_\_\_\_

### Part 8: Using Pronouns

Choose the correct pronoun from each pair in parentheses.

51. Rosa and (she, her) are both running for class president.  
\_\_\_\_\_
52. For (who, whom) will you vote?  
\_\_\_\_\_
53. (Its, It's) hard to choose the best candidate.  
\_\_\_\_\_
54. I told Kyle and (he, him) to run for vice president.  
\_\_\_\_\_
55. I think that the best candidates are Shawna and (she, her).  
\_\_\_\_\_
56. Whose speech did you like better, Kyle's or (her's, hers)?  
\_\_\_\_\_
57. (Who, Whom) will do the best job on the student council?  
\_\_\_\_\_
58. If the job were (yours, your's), what would you do?  
\_\_\_\_\_
59. Ben made posters with Rosa and (I, me).  
\_\_\_\_\_
60. (Who, Whom) did you ask to put up the posters?  
\_\_\_\_\_

### Part 9: Making Words Agree

For each sentence, choose the correct verb or pronoun in parentheses. Verbs should agree with their subjects, and pronouns should agree with their antecedents.

61. Each of the girls (is, are) finishing (her, their) science project.  
\_\_\_\_\_
62. Danny and Chad (is, are) working together on (his, their) project.  
\_\_\_\_\_
63. Emma knows that (she, you) must work very hard to win a prize.  
\_\_\_\_\_
64. (Here's, Here are) the materials we need to make our weather station.  
\_\_\_\_\_

65. Working quietly in the corner (is, are) the girls who won the competition last year.

66. Either Danny or Chad (was, were) working after school yesterday.

67. One of the boys (needs, need) to improve (his, their) grades.

68. Some of the students (is, are) using (his or her, their) computers to do research.

69. (There's, There are) very strict rules for the competition.

70. Neither parents nor teachers (is, are) allowed to help.

### Part 10: Using Modifiers

Choose the correct form of the modifiers in parentheses.

71. Jake swims (faster, more faster) than Ben.

72. Jamahl is the (best, bestest) swimmer on the team.

73. He swims faster than (anyone, anyone else) on the team.

74. Alberto is the (better, best) of those two divers.

75. He does the (difficultest, most difficult) dives in the whole competition.

76. That diving board is (higher, more higher) than this one.

77. Tyler practices his dives more than (any, any other) diver.

78. He makes (less, fewer) mistakes than I do.

79. I dive very (good, well), but he usually does (better, more better) at competitions.

80. I felt (bad, badly) when I didn't win a medal, but I will be (relaxeder, more relaxed) at the next competition.

Name \_\_\_\_\_

**Part 11: Punctuation**

Copy the following sentences, adding commas, semicolons, colons, quotation marks, underlining, hyphens, and apostrophes where they are needed.

81. Johnny Tremain a novel about the Revolutionary War was written by Esther Forbes.
82. This novel which you can find in most libraries won the Newbery Medal when it was first published.
83. Among the characters in the novel are such well loved historical figures as Samuel Adams Paul Revere and John Hancock.
84. In the beginning of the novel Johnny is the kind of person who cares very little about politics.
85. When some Boston patriots help him out in a time of desperate need however he changes his mind and soon he is participating in the Boston Tea Party.
86. The novel also describes the Battle of Lexington this was the battle that occurred after Paul Revere warned the colonists that British troops were approaching.
87. In my opinion a good novel needs three elements a good plot interesting characters and an important message about life.
88. Many peoples favorite poem is Paul Reveres Ride.
89. I like that poem, Joanna said because it tells a true story in an exciting way.
90. She said Its also fun to read this poem aloud because it has such a great rhythm to it. Would you like to read it with me Michael?

Name \_\_\_\_\_

Date \_\_\_\_\_

**Summer Math****Students going into 8<sup>th</sup> Grade Algebra****Evaluate the expression when  $x = 3$ ,  $y = 5$ , and  $z = 6$ .**

1.  $3x - y$

2.  $(y + z)^2 - x$

3.  $\frac{2z - x}{3}$

**Find the sum, difference, product, or quotient.**

4.  $42 + (-19)$

5.  $-28 - 41$

6.  $-16 - (-35)$

7.  $14(-6)$

8.  $\frac{-36}{-4}$

9.  $\frac{296}{-8}$

**State the absolute value and the opposite of the number.**

10.  $-25$

11.  $9$

12.  $87$

13.  $-33$

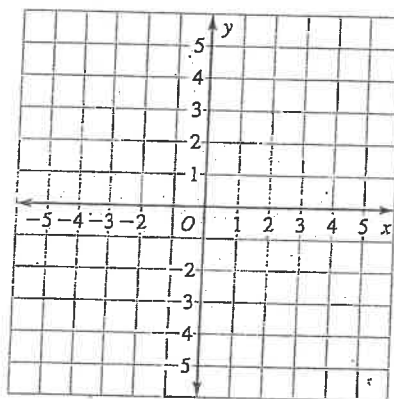
**Plot the point in the coordinate plane. Describe the location of the point.**

14.  $A(-2, 3)$

15.  $B(1, 3)$

16.  $C(-4, -3)$

17.  $D(3, -1)$

**Identify the property that the statement illustrates.**

18.  $c + 0 = c$

19.  $f(gh) = (fg)h$

20.  $x + y = y + x$

**Evaluate the expression using the distributive property and mental math.**

21.  $5(34)$

22.  $3(84)$

23.  $8(7.3)$

24.  $9(6.2)$

**Simplify the expression.**

25.  $26 + 3x - 19 + 24x$

26.  $-6(3t - 2) + 28$

27.  $7b + 4b + 17b$

**Write the verbal sentence as an equation. Then tell whether 7 is a solution of the equation.**

28. The difference of 14 and  $y$  is 21.

29. The product of  $z$  and  $-6$  is  $-42$ .

**Answers**

1. \_\_\_\_\_

2. \_\_\_\_\_

3. \_\_\_\_\_

4. \_\_\_\_\_

5. \_\_\_\_\_

6. \_\_\_\_\_

7. \_\_\_\_\_

8. \_\_\_\_\_

9. \_\_\_\_\_

10. \_\_\_\_\_

11. \_\_\_\_\_

12. \_\_\_\_\_

13. \_\_\_\_\_

14. See left.

15. See left.

16. See left.

17. See left.

18. \_\_\_\_\_

19. \_\_\_\_\_

20. \_\_\_\_\_

21. \_\_\_\_\_

22. \_\_\_\_\_

23. \_\_\_\_\_

24. \_\_\_\_\_

25. \_\_\_\_\_

26. \_\_\_\_\_

27. \_\_\_\_\_

28. \_\_\_\_\_

29. \_\_\_\_\_

Name \_\_\_\_\_

Date \_\_\_\_\_

**Solve the equation.**

30.  $8n = -104$

31.  $h - 41 = -6$

32.  $-\frac{t}{5} = 15$

33.  $-3p - 7 = 5$

34.  $4(3 - 2x) = -44$

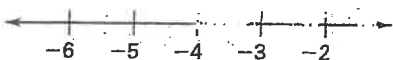
35.  $-8 = 8(4g + 3)$

**Solve the inequality. Graph your solution.**

36.  $x - 6 \geq 5$



37.  $-4b - 3 \leq 13$

**Find the greatest common factor of the monomials.**

38.  $6x, 9x$

39.  $5t, 15t^2$

40.  $7x^3z^4, 34x^5z^2$

**Find the least common multiple of the monomials.**

41.  $8t, 24t$

42.  $6x, 12x^3$

43.  $24r^3s^2, 15r^2s^6$

**Find the product or quotient. Write your answer using only positive exponents.**

44.  $u^4 \cdot u^9$

45.  $x^3 \cdot x^{-4}$

46.  $\frac{p^7}{p^2}$

47.  $\frac{t^{-6}}{t^3}$

**Find the sum, difference, product, or quotient.**

48.  $\frac{5}{7} + \left(-\frac{6}{7}\right)$

49.  $5\frac{3}{4} - 2\frac{2}{3}$

50.  $-1\frac{1}{5} \cdot \left(6\frac{1}{2}\right)$

51.  $-8\frac{1}{3} \div \left(-4\frac{1}{6}\right)$

**Solve the equation or inequality by first clearing the fractions or the decimals.**

52.  $\frac{1}{3}x - 4 < \frac{5}{6}$

53.  $-\frac{3}{8}x + \frac{1}{4} \geq \frac{7}{12}$

54.  $4.2x + 3.5 = 16.1$

55.  $8.5x - 6.97 = 38.08$

**Solve the proportion.**

56.  $\frac{7}{12} = \frac{49}{w}$

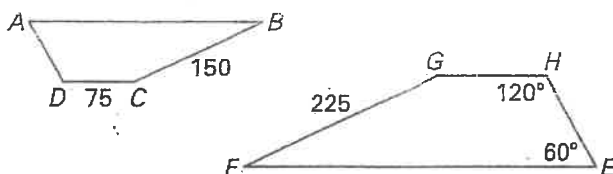
57.  $\frac{96}{b} = \frac{48}{51}$

58.  $\frac{9.2}{x} = \frac{2.3}{16}$

59.  $m\angle A$

60.  $m\angle D$

61.  $GH$

**Answers**

30. \_\_\_\_\_

31. \_\_\_\_\_

32. \_\_\_\_\_

33. \_\_\_\_\_

34. \_\_\_\_\_

35. \_\_\_\_\_

36. \_\_\_\_\_

See left.

37. \_\_\_\_\_

See left.

38. \_\_\_\_\_

39. \_\_\_\_\_

40. \_\_\_\_\_

41. \_\_\_\_\_

42. \_\_\_\_\_

43. \_\_\_\_\_

44. \_\_\_\_\_

45. \_\_\_\_\_

46. \_\_\_\_\_

47. \_\_\_\_\_

48. \_\_\_\_\_

49. \_\_\_\_\_

50. \_\_\_\_\_

51. \_\_\_\_\_

52. \_\_\_\_\_

53. \_\_\_\_\_

54. \_\_\_\_\_

55. \_\_\_\_\_

56. \_\_\_\_\_

57. \_\_\_\_\_

58. \_\_\_\_\_

59. \_\_\_\_\_

60. \_\_\_\_\_

61. \_\_\_\_\_